




## Immigration

The two pie charts below show the proportions of people who came to the United States from Europe in 1880 and in 1900.



European Immigration from Region of Origin

-  Immigration from northern and western Europe (includes Great Britain, Ireland, Scandinavia, Germany)
-  Immigration from southern and eastern Europe (includes Poland, Russia, Italy, Baltic countries, others)

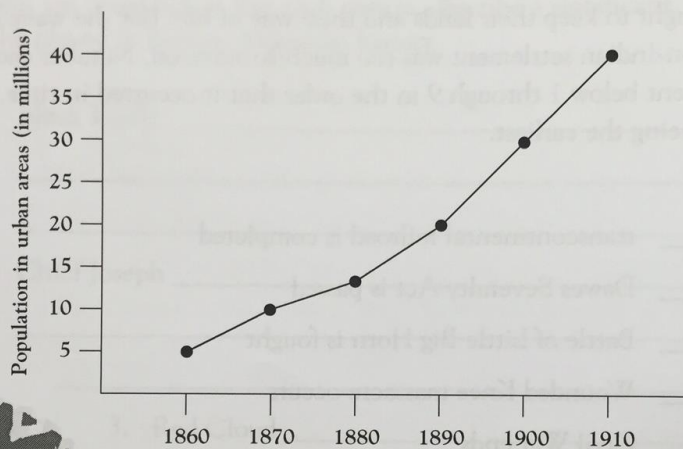
1. Who made up the largest group of immigrants from Europe in 1880?  
Who made up the largest group of immigrants from Europe in 1900?
2. What caused this change? What might have drawn these people to come to the United States? Write two or three sentences that explain your answer.

122

© 2006 Walch Publishing

## City People

Look at the graph below.



What population trend do you see in this graph? Make two observations about the information the graph presents.

120

© 2006 Walch Publishing